



Class: 5th Date: 21st May, 2020

Subject: English “Weavers”

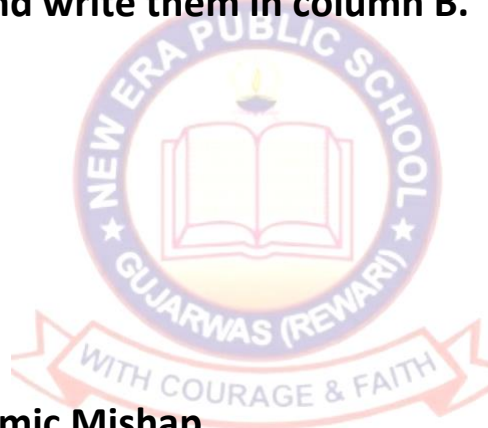
Read page number 8 and 9 and do below on page 9 and 10

A. Can you rewrite these names with capital letters?

1. Anthony Horowitz
2. Diamond Brothers
3. The Power of Five
4. Udraw: Instant Artist
5. The Sea Lion

B. Expand these words and write them in column B.

1. It is
2. Do not
3. Would not
4. Where will
5. I have



Today's Topic

Read Lesson 2, Aerodynamic Mishap.

Lesson -1 Carry the Carrier

A The young man had three more pieces of advice. What do you think was in each slip? In the space below, write the advice. Which words will you capitalize and which pronouns will you use?

Advice for ₹20
(segregating waste)

Advice for ₹25
(reuse waste)

Advice for ₹30
(recycle waste)

You surely would have many questions about reusing and recycling. Write them down. Where do you think you can find an answer? You can ask your partner, teacher, parents, or any other person you know.



EXERCISES

A. Choose the correct answer.

1. The outer hard covering of a seed is called
(a) cotyledon (b) seed coat (c) plumule (d) radicle
2. The process of scattering of seeds away from the mother plant is called
(a) germination (b) pollination (c) dispersal (d) reproduction
3. Carrot and sweet potato can grow new plants from their
(a) leaves (b) stems (c) roots (d) seeds
4. Cotton plant grows well in
(a) sandy soil (b) loamy soil
(c) black soil (d) clayey soil
5. The most common plants of deserts are
(a) cactus and prickly pear (b) coconut and rubber
(c) pine and fir (d) neem and banyan
6. Urea, ammonium sulphate, superphosphates are some common
(a) manures (b) fertilizers
(c) organic substances (d) insecticides
7. Wheat and gram are the examples of
(a) rabi crops (b) kharif crops
(c) zaid crops (d) none of these

QUICK ASSIGNMENT

A. Write T for true or F for false against the given statements.

1. Embryo is the tiny plant inside a seed.
2. Cotyledons contain stored food for new plant.
3. Black soil is good for the growth of cotton and tea plant.
4. Rice, jowar, bajra are the kharif crops that grow in summer.

B. Match the following column A with column B.

- | Column A | Column B |
|----------------------------|--|
| 1. Rose → (d) | (a) new plants arise along the edges of the leaf |
| 2. Bryophyllum → (a) | (b) grow from root |
| 3. Pea → (e) | (c) grows from buds (eye) |
| 4. Carrots and beets → (b) | (d) stem cutting |
| 5. Potato → (c) | (e) explosion |

Assignment (The Land of Hot Sea: Saudi Arabia)

A. Choose the correct option from the following:

1. It passes through the Saudi Arabia.

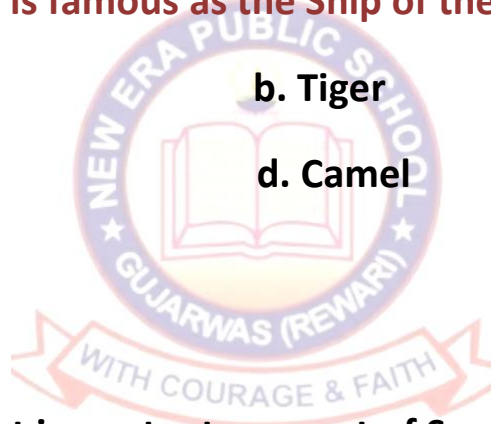
- | | |
|-------------------------------|----------------------------|
| a. Tropic of Capricorn | b. Tropic of Cancer |
| c. Equator | d. Arctic Circle |

2. Petroleum is also known as _____

- | | |
|-----------------------|-------------------------|
| a. A diamond | b. Liquid silver |
| c. Liquid gold | d. None of these |

3. Which of the following is famous as the Ship of the desert?

- | | |
|----------------|-----------------|
| a. Cow | b. Tiger |
| c. Lion | d. Camel |



B. Fill in the blanks:

1. is the most important sea port of Saudi Arabia.
2. Saudi Arabia has rich deposits of
3. is the capital of Saudi Arabia.
4. The nights in desert are

C. Match the following:

- | | |
|----------------------------|--------------------------|
| 1. Bedouins | a. port city |
| 2. Jeddah | b. pilgrim centre |
| 3. Mecca and Medina | c. nomads |

D. Write the name of at least one desert located in each continent.

1. Asia _____

2. Australia _____

3. South America _____

E. Unscramble the following letters.

1. S A S I O _____

2. H A D Y I R _____

3. T H A B W _____

F. Answer the following questions:

Q. 1 Which dress is worn by women of Saudi Arabia?

Q. 2 Name the crops grown in Saudi Arabia.

Q. 3 What do you know about the location of the Arabian desert?

Q. 4 Why do people visit Mecca and Medina?

Q. 5 What do you know about Bedouins?

#Try to solve the assignment by yourself. Answers will be provided tomorrow.

Class -5th Subject -Hindi

पाठ-४ देश की आन बान शान -हमारा तिरंगा के शब्दार्थ लिखो व याद करो।



शब्द-अर्थ

ध्वज	- झंडा (Flag)	प्रतीक	- निशान (Symbol)
स्वतंत्र	- आजाद (Independent)	समृद्धि	- संपन्नता (Prosperity)
सम्मान	- आदर (Respect)	सदाचार	- अच्छा व्यवहार (Good behavior)
आन, बान	- इज्जत (Respect)	निरंतर	- लगातार (Continuous)
शान	- गौरव (Proud)	प्रगति	- उन्नति (Progress)
केसरिया	- संतरी (Saffron)	राष्ट्रीय	- देश से संबंधित (National)

Class: 5th Subject: Maths

Least Common Multiple (LCM)

The LCM of two or more given numbers is the smallest multiple of each of the given numbers.

For example, let us consider the numbers 4 and 6

The multiples of 4 are 4,8,12,16,20,24,28.....

The multiples of 6 are 6,12,18,24,30,36,42.....

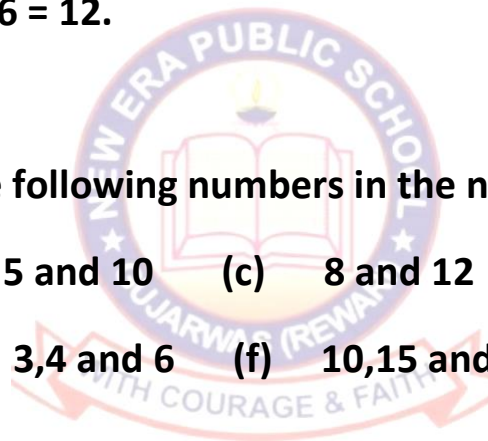
The common multiples of 4 and 6 are 12, 24

The least common multiples of 4 and 6 is 12.

Hence, the LCM of 4 and 6 = 12.

Q. 1 Find the LCM of the following numbers in the note book.

- (a) 4 and 8 (b) 5 and 10 (c) 8 and 12
(d) 6 and 9 (e) 3,4 and 6 (f) 10,15 and 20



Class: 5th Subject: G.K.

Q. 1 Gir National Park in Gujarat is famous for.....

Ans. Asiatic Lion.

Q. 2 Baby of horse is called

Ans. Foal.

Q. 3 Which animal has hump on its back?

Ans. Camel.

Q. 4 Where does a dog live?

Ans. Kennel.

Q. 5 We should cross the road when traffic light is

Ans. Green.

Q. 6 Name the place where animals and birds are kept.

Ans. Zoo.

Q. 7 Which colour is the symbol of peace?

Ans. White.

#Learn and write in notebook.

