

Class: 1st Date: 12th May, 2020

Subject: Hindi

Class-1st Sub-Hindi

11 औ की मात्रा (ौ)



नौका



कौआ



हथौड़ा



चौकीदार

❁ समझिए और पढ़िए।

ौ	—
ौ	।
ौ	— —
ौ	। —

कौन	दौड़	मौन
नौका	चौका	मौका
सौरभ	कौशल	गौरव
फौलाद	चौहान	चौपाल

❁ बोलिए और अंतर समझिए।

गोरी	गौरी	:	लोट	लौट	:	सो	सौ
नोक	नौका	:	खोलना	खौलना	:	शोक	शौक

मौलिक और गौरी के घर मौसा-मौसी जी आए।

मौसी जी खिलौने लाई।

मौसा जी ने एक पौधा दिया।

मौलिक ने पौधा बाहर रखा।

गौरी ने खिलौने चौकी पर रखे।

मौलिक और गौरी की मौज हो गई।




ऊपर दिए गए चित्र में औ की मात्रा (ौ) को समझें और पढ़ें व अपनी नोटबुक में लिखें।

Subject: English


Watch video and enjoy your reading :

Composition

A. Look at the jumbled pictures below. They tell a story. Number the pictures 1, 2, 3, and 4 to put them in the correct order.



B. Now complete the story with words from the help box.



Once there was a dog. His name was Jamie. He lived on a farm. One day he saw a bone lying in the grass. He took the bone and went for a walk on a bridge on a pond. He saw his own image in the water. He thought it was another dog with a bone in the pond. He wanted that bone too! He opened his mouth to take the other bone from the water. As soon as he opened his mouth, his bone fell into the pond. The dog was greedy and lost the bone he had.

Class: 1st Subject: Maths

Write and learn tables of 13, 14, 15: -

Table of 13:

$$13 \times 1 = 13$$

$$13 \times 2 = 26$$

$$13 \times 3 = 39$$

$$13 \times 4 = 52$$

$$13 \times 5 = 65$$

$$13 \times 6 = 78$$

$$13 \times 7 = 91$$

$$13 \times 8 = 104$$

$$13 \times 9 = 117$$

$$13 \times 10 = 130$$



Table of 14:

$$14 \times 1 = 14$$

$$14 \times 2 = 28$$

$$14 \times 3 = 42$$

$$14 \times 4 = 56$$

$$14 \times 5 = 70$$

$$14 \times 6 = 84$$

$$14 \times 7 = 98$$

$$14 \times 8 = 112$$

$$14 \times 9 = 126$$

$$14 \times 10 = 140$$

Table of 15:

$15 \times 1 = 15$

$15 \times 2 = 30$

$15 \times 3 = 45$

$15 \times 4 = 60$

$15 \times 5 = 75$

$15 \times 6 = 90$

$15 \times 7 = 105$

$15 \times 8 = 120$

$15 \times 9 = 135$

$15 \times 10 = 150$

Class: 1st Subject: EVS

Answer the following questions in fair notebook: -

1) What do you do at your school?

Ans: Study.

2) Where do you sit and study in the school?

Ans: Class room.

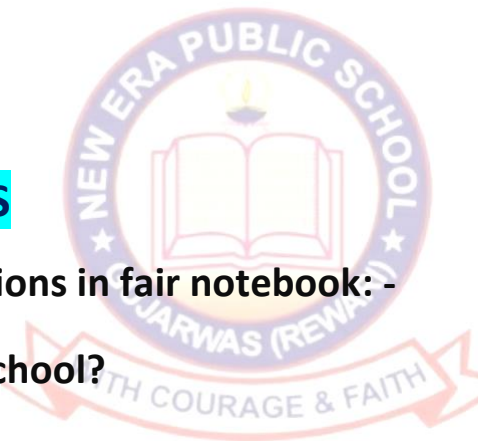
Class: 1st Subject: G.K.

Q.1 When is Earth Day celebrated?

Ans. 22 April

Q.2 Which is the place where animals can live safely and naturally?

Ans. Zoo



Q.3 When is the World Environment Day celebrated?

Ans. 5 June

Q.4 What type of a shopping bag is most environment -friendly?

Ans. Cloth bag

Q.5 What is the best way to deal with garbage?

Ans. Recycle it

*** Write and Learn in notebook.**

